









Name: Brad

Class: 6white

Date: 23rd May

For each pair of decimal numbers circle the one which is LARGER.

0.4	<u>0.457</u>	1.06	<u>1.053</u>	<u>4.4502</u>	4.45
0.86	<u>1.3</u> 	4.08	<u>4.7</u> 	<u>17.353</u>	17.35
0.3	<u>0.4</u> 	<u>3.72</u>	3.073 	8.245	<u>8.24562</u> 
<u>1.85</u>	1.84	<u>2.621</u>	2.06879 	<u>3.2618</u>	3.26
3.71	<u>3.76</u> 	8.052573	<u>8.514</u>	3.741	<u>3.746</u>
4.8	<u>4.63</u>	5.62	<u>5.736</u>	0.35	<u>0.42</u>
0.5	<u>0.36</u>	0.5	<u>0.75</u>	2.186	<u>2.954</u>
<u>0.75</u>	0.8	<u>0.426</u>	0.3	<u>0.872</u>	0.813
0.37	<u>0.216</u> 	2.516	<u>2.8325</u>	<u>0.038</u>	0.04
3.92	<u>3.4813</u>	<u>7.942</u>	7.63	0.006	<u>0.53</u> 