











Name: Maria

Class: X

Date: September 12th

For each pair of decimal numbers circle the one which is LARGER.

0.4	<u>0.457</u>		<u>1.06</u>	1.053		4.4502	<u>4.45</u>	
0.86	<u>1.3</u>		4.08	<u>4.7</u>		17.353	<u>17.35</u>	
0.3	<u>0.4</u>		<u>3.72</u>	3.073		<u>8.245</u>	8.24563	
<u>1.85</u>	1.84		<u>2.621</u>	2.0687986		3.2618	<u>3.26</u>	
3.71	<u>3.76</u>		8.052573	<u>8.514</u>		3.741	<u>3.746</u>	
<u>4.8</u>	4.63		5.62	<u>5.736</u>		0.35	<u>0.42</u>	
<u>0.5</u>	0.36		0.5	<u>0.75</u>		2.186	<u>2.954</u>	
0.75	<u>0.8</u>		<u>0.426</u>	0.3		<u>0.872</u>	0.813	
<u>0.37</u>	0.216		2.516	<u>2.8325</u>		0.038	<u>0.04</u>	
<u>3.92</u>	3.4813		<u>7.942</u>	7.63		0.006	<u>0.53</u>	